





1. Depict the water cycle with arrows!



2. Match the images with the names of natural phenomena.



Tornado

Lightning

Hail

Rain

3. Circle the correct answer!

1. Device for measuring air temperature:

- thermometer
- anemometer
- ruler

2. Natural phenomenon – moving air flow:

- rain
- wind
- lightning

3. Natural phenomenon with a strong increase in wind:

- rain
- hail
- storm

4. Device for measuring wind speed:

- anemometer
- thermometer
- yardstick

5. Natural phenomenon, when raindrops fall from clouds:

- snow
- hail
- rain

4. Draw the natural phenomenon that you like the most!

Write how it is called!

